


COMPARACIÓN DE FRACCIONES


Escribe el símbolo $<$, $>$ según corresponda

(Fracciones con el mismo numerador)




$\frac{4}{5}$

$>$




$\frac{4}{14}$

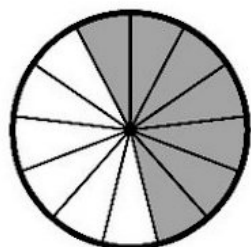


$\frac{3}{19}$

$<$

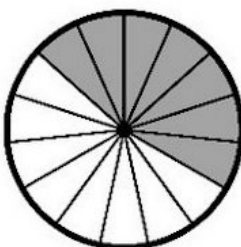


$\frac{3}{7}$

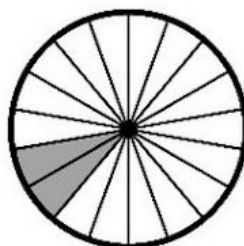


$\frac{7}{13}$

$<$

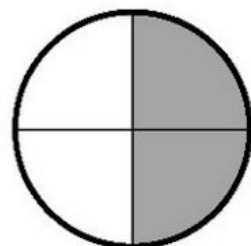


$\frac{7}{15}$




$\frac{2}{18}$

$<$




$\frac{2}{4}$




$\frac{2}{11}$

$<$




$\frac{2}{20}$

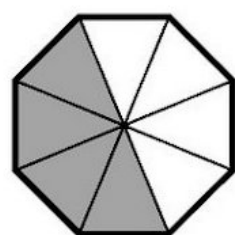


$\frac{1}{10}$

$<$

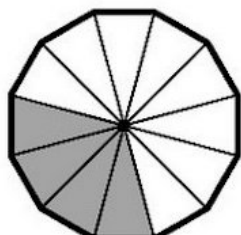


$\frac{1}{9}$

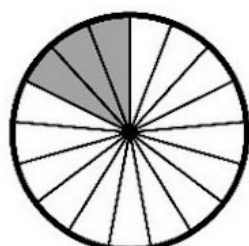


$\frac{4}{8}$

$<$

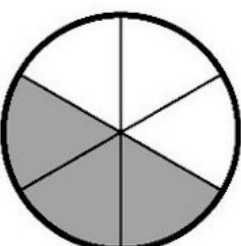


$\frac{4}{12}$



$\frac{3}{17}$

$<$



$\frac{3}{6}$

