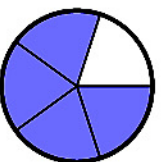


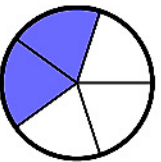
COMPARA FRACCIONES

Colorea el espacio fraccionado y pon $<$ $>$ según corresponda

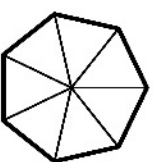


$\frac{4}{5}$

$>$

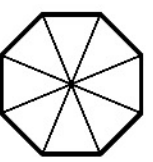


$\frac{2}{5}$




$\frac{4}{7}$

$<$




$\frac{4}{8}$




$\frac{2}{8}$

$<$




$\frac{6}{8}$

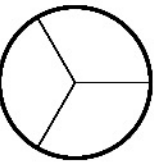


$\frac{1}{9}$

$<$

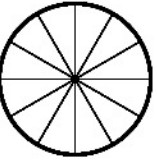


$\frac{1}{5}$

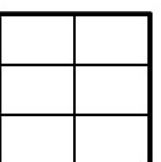


$\frac{2}{3}$

$<$

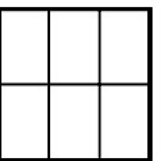


$\frac{2}{12}$

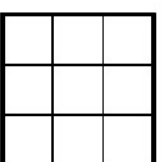


$\frac{4}{6}$

$<$

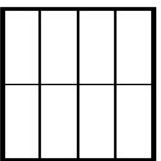


$\frac{5}{6}$

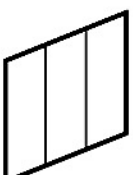


$\frac{7}{9}$

$<$



$\frac{7}{8}$

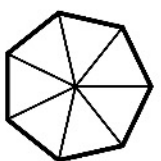


$\frac{2}{3}$

$<$

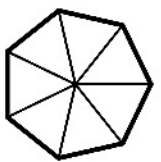


$\frac{1}{3}$




$\frac{4}{7}$

$<$




$\frac{3}{7}$




$\frac{1}{12}$

$<$

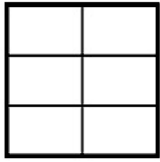


$\frac{1}{2}$

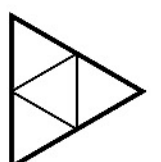


$\frac{5}{6}$

$<$

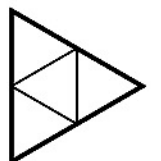


$\frac{2}{6}$

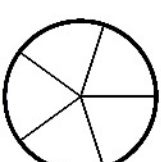


$\frac{2}{4}$

$<$

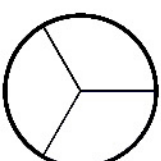


$\frac{1}{4}$

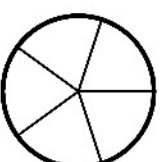


$\frac{1}{5}$

$<$

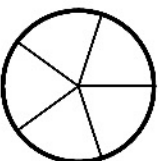


$\frac{1}{3}$

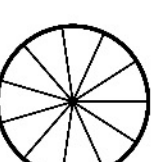


$\frac{3}{5}$

$<$

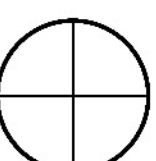


$\frac{2}{5}$




$\frac{2}{11}$

$<$




$\frac{2}{4}$



$\frac{1}{10}$

$<$



$\frac{1}{6}$

