




# DIVISIÓN JURÁSICA

¿Conoces los nombres de estos dinosaurios?  
Calcula las divisiones y el resto te dará la clave.



18908

756

32104



369

37863

823

49867

514


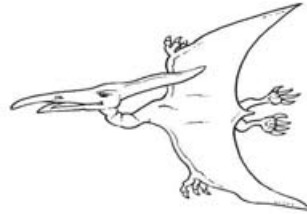



210375

6574

445513

9685



24639

357

21979


293

53288

642

13932

516



**CLAVE:**

Si el resto de las divisiones te da:

- 0. Plesiosaurio
- 1. Iguanodonte
- 2. Triceraptor
- 3. Brontosaurio
- 4. Pteronodonte

- 5. Parasaurolophus
- 6. Stegosaurio
- 7. Braquiosaurio
- 8. Tiranosaurio Rex
- 9. Velocireptor