




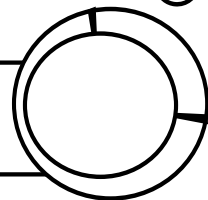
Averigua el número del escudo vikingo partiendo del que aparece en el casco y contando según las claves que tienes en esta tabla.

ATENCIÓN: En las dos últimas para averiguar el número del que procede invierte el valor de las claves.


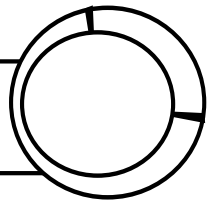
Cuenta	Adelante	Atrás
De 1 en 1		—
De 10 en 10	○	⊖




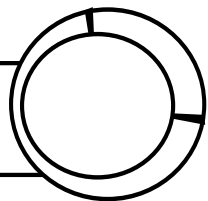
○ |||| ○ || ⊖ ○ ○ ○ — ||| ⊖



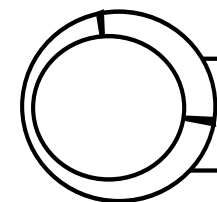
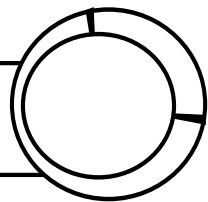
|| ○ ○ ○ ○ ○ || ⊖ || — ○ ○



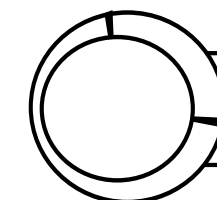

⊖ ⊖ ⊖ || ○ ○ ⊖ ○ ○ |||| —



— ||| — ○ ○ ⊖ ○ ○ ○ — | — ||



○ ○ — ⊖ ⊖ ||| — — — ||| ⊖



| ○ ○ ⊖ — ○ — |||| ○ ⊖ —

