



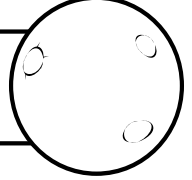
Averigua el número del planeta partiendo del que aparece en el cohete y contando según las claves que tienes en esta tabla.

ATENCIÓN: En las dos últimas para averiguar el número del que procede invierte el valor de las claves.


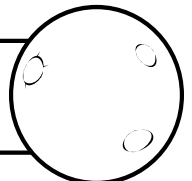
Cuenta	Adelante	Atrás
De 1 en 1		—
De 10 en 10	○	⊖
De 100 en 100	△	△




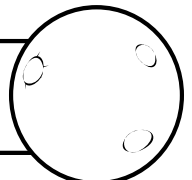
△ △ ||| ⊖ || △ △ △ — ○ ○ ○



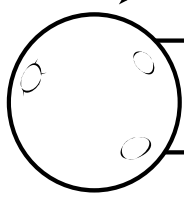
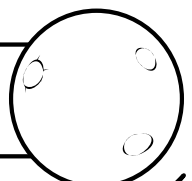
○ ○ ○ △ △ △ ||||| ○ △ ||||



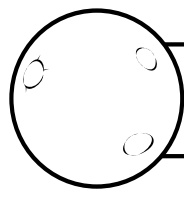

| ○ △ △ || ○ △ ⊖ △ △ |||||



△ △ |||| ⊖ || ○ △ ○ — ○ ||| ⊖



△ △ △ △ ||| △ || ○ |||| ○ △



○ ○ △ △ △ ○ △ ⊖ △ ○ |||||

