












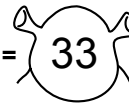


















Nombre: \_\_\_\_\_

Fecha: \_\_\_\_\_

# TRIPLES

(Iniciación a la multiplicación)

Calcula el triple de los siguientes números como la suma de tres veces el mismo número y busca en el mismo orden los resultados, los vas uniendo y obtendrás un dibujo.

- |                    |  |    |                    |  |    |                    |  |    |                    |  |    |
|--------------------|--|----|--------------------|--|----|--------------------|--|----|--------------------|--|----|
| ① $4 + 4 + 4 =$    |   | 12 | ② $2 + 2 + 2 =$    |   | 6  | ③ $8 + 8 + 8 =$    |   | 24 | ④ $9 + 9 + 9 =$    |   | 27 |
| ⑤ $6 + 6 + 6 =$    |   | 18 | ⑥ $3 + 3 + 3 =$    |   | 9  | ⑦ $7 + 7 + 7 =$    |   | 21 | ⑧ $1 + 1 + 1 =$    |   | 3  |
| ⑨ $5 + 5 + 5 =$    |   | 15 | ⑩ $11 + 11 + 11 =$ |   | 33 | ⑪ $10 + 10 + 10 =$ |   | 30 | ⑫ $12 + 12 + 12 =$ |   | 36 |
| ⑬ $15 + 15 + 15 =$ |   | 45 | ⑭ $13 + 13 + 13 =$ |   | 39 | ⑮ $14 + 14 + 14 =$ |   | 42 | ⑯ $16 + 16 + 16 =$ |   | 48 |
| ⑰ $19 + 19 + 19 =$ |   | 57 | ⑱ $17 + 17 + 17 =$ |   | 51 | ⑲ $18 + 18 + 18 =$ |   | 54 | ⑳ $21 + 21 + 21 =$ |   | 63 |
| ㉑ $20 + 20 + 20 =$ |   | 60 | ㉒ $22 + 22 + 22 =$ |   | 66 | ㉓ $25 + 25 + 25 =$ |   | 75 | ㉔ $24 + 24 + 24 =$ |   | 72 |
| ㉕ $28 + 28 + 28 =$ |  | 84 | ㉖ $26 + 26 + 26 =$ |  | 78 | ㉗ $27 + 27 + 27 =$ |  | 81 | ㉘ $23 + 23 + 23 =$ |  | 69 |

