




Nombre: _____



Fecha: _____

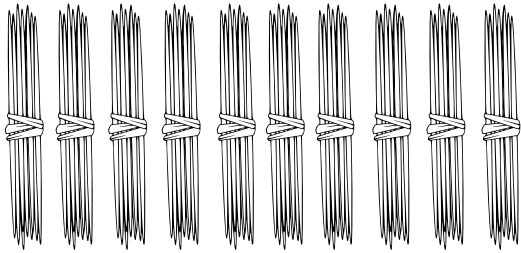


100 Las centenas

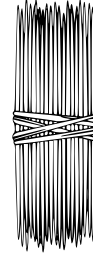


MAESTRO JESÚS GONZÁLEZ MOLINA
gonzalez_molina79@hotmail.com

A los grupos de palillos que nos dan 100, 200, 300, 400, 500, 600, 700, 900 les llamamos centenas.



$$= 100 =$$



Estos grupos de a 10 los amarramos todos juntos y tenemos 100 palillos.

Estos palillos que están amarrados son de a 10, entonces 10 montones de a 10, nos dan 100


En tu cuaderno recorta las centenas y pégalas de menor a mayor.




100




200




300



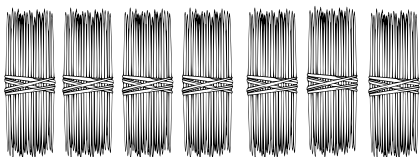
400




500



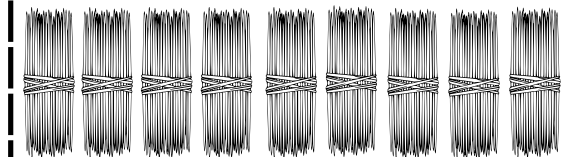
600



700



800



900

Realiza estas sumas mentales:

$100 + 10 = \underline{\quad}$

$200 + 23 = \underline{\quad}$

$800 + 59 = \underline{\quad}$

$200 + 10 = \underline{\quad}$

$300 + 89 = \underline{\quad}$

$100 + 28 = \underline{\quad}$

$400 + 77 = \underline{\quad}$

$150 + 10 = \underline{\quad}$

$120 + 33 = \underline{\quad}$

$300 + 19 = \underline{\quad}$

$900 + 12 = \underline{\quad}$

$200 + 18 = \underline{\quad}$

Aprendemos a descomponer un número de 3 cifras en centenas, decenas y unidades.

$$345 = 3 \text{ c} + 4 \text{ d} + 5 \text{ u}$$

Desagupa los siguientes números:

$421 = \underline{\quad}$

$123 = \underline{\quad}$

$672 = \underline{\quad}$

