


JERARQUÍA DE OPERACIONES


Nombre: _____


Fecha: _____


Resuelve las siguientes operaciones combinadas y colorea el mosaico con la pieza asignada. Ten cuidado ya que una misma pieza puede ser coloreada por dos ecuaciones con la misma solución y posición diferente.


La solución no es un dibujo concreto, sino un mosaico simétrico.


 $7 - 4 + 9$


 $8 - 2 - 3$


 $23 + 1 - 5$


 $12 : 4 \times 8$


 $36 : 2 : 3$


 $6 \times 9 : 3$


 $3 + 6 : 3$


 $11 \times 2 - 5$


 $3 \times 2 + 4$


 $(7 - 4) \times 5$


 $3 \times (3 + 4)$


 $(21 + 1) : 2$


 $4 \times (24 : 6)$


 $7 + 6 \times 3$


 $14 : 2 - 3$


 $18 : 2 - 8$


 $22 + 3 - 6 : 3$


 $20 - 2 - 2 \times 8$


 $2 + 3 \times 7 - 9$


 $(9 - 5) \times 5$

 $8 \times 2 - 1 \times 9$

 $(4 + 2) : 3 + 7$

 $(5 \times 4) + (8 : 4)$

 $(12 \times 5) : (9 + 3)$

 $(9 - 2 + 9) : 2$



1	2	3	4	5
6	7	8	9	10
11	12	13	14	15
16	17	18	19	20
21	22	23	24	25