





















SUMAS REPETIDAS 2

Con ayuda de taparrosas y canicas, resuelve las sumas repetidas, luego arma el puzzle correctamente.

 $3 \times 2 = \square$	 $2 \times 4 = \square$	 $5 \times 2 = \square$	 $5 \times 5 = \square$
 $3 \times 4 = \square$	 $4 \times 6 = \square$	 $1 \times 5 = \square$	 $2 \times 7 = \square$
 $1 \times 3 = \square$	 $8 \times 2 = \square$	 $7 \times 3 = \square$	 $4 \times 1 = \square$
 $3 \times 6 = \square$	 $7 \times 4 = \square$	 $1 \times 9 = \square$	 $6 \times 6 = \square$
 $9 \times 3 = \square$	 $7 \times 1 = \square$	 $5 \times 4 = \square$	 $6 \times 7 = \square$

