

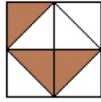
Nombre: _____

Fecha: _____

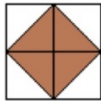


MOSAICO DE ECUACIONES

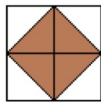
Resuelve las ecuaciones de primer grado en tu cuaderno, luego colorea de acuerdo al código que tiene cada operación



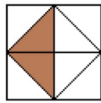
$x - 1 = 0$



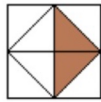
$x - 11 = 3$



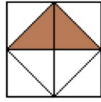
$x - 3 = 8$



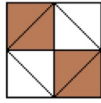
$x + 22 = 38$



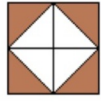
$x + 3 = 23$



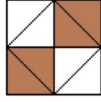
$x + 17 = 19$



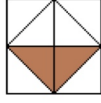
$x - 1 = 6$



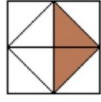
$x + 15 = 28$



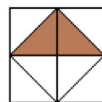
$x + 15 = 32$



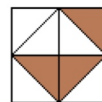
$x - 12 = 10$



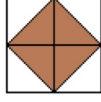
$x + 5 = 15$



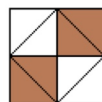
$x + 15 = 19$



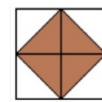
$x - 1 = 4$



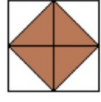
$x + 26 = 34$



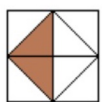
$x + 2 = 11$



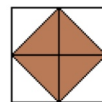
$x + 13 = 36$



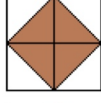
$x + 7 = 19$



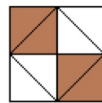
$x + 12 = 18$



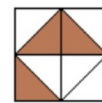
$x - 13 = 2$



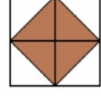
$x - 12 = 6$



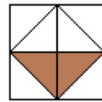
$x - 12 = 7$



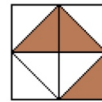
$x - 17 = 4$



$x + 11 = 14$



$x - 12 = 12$



$x + 3 = 28$

01	02	03	04	05
06	07	08	09	10
11	12	13	14	15
16	17	18	19	20
21	22	23	24	25