









Nombre:

Fecha:



# LABERINTO DE ECUACIONES

<b>INICIO</b> $7x + 1 = 22$	(-3)	$-9 = -15 + 2x$	(-5)	$\frac{x}{5} + 7 = 6$
3		8		$\frac{2}{5}$
$-5x + 42 = -8$	(10)	$\frac{x}{4} + 2 = 5$	(12)	$6x + 5 = 23$
-17		7		3
$4x + 7 = 19$	(9)	$5 + 9x = 104$	(8)	$8 - \frac{x}{4} = 6$
3		11		-8
$7 = 3 + \frac{x}{12}$	(44)	$5 = -6 + \frac{x}{4}$	(-36)	$\frac{8 + x}{4} = -2$
48		36		16
$65 = 11 + 6x$	(9)	$8 = \frac{x + 9}{3}$	(15)	<b>FIN</b>

